






Activity

1. Use tracing paper, a map and an aerial image of your local area to identify different types of land use and shade each one. Use the key to help you.
2. Answer the questions about land use in your local area.

insert map of your local area

| Map key | |
|--|--------------------------|
|  | residential |
|  | industrial or commercial |
|  | recreational |
|  | agricultural |
|  | natural spaces |

1. Which type of land use covers the largest area on the map?

2. Which type of land use covers the smallest area on the map?

3. Which type of land use was easiest to identify? Why?

4. Which type of land use was the most difficult to identify? Why?

5. Are there any areas where land use might cause problems like pollution or traffic?

